

Name: _____ Date: _____



On the map below, and using the Map of Spain to help you, can you put the labels in the correct places?



Now using your knowledge and the information on your map, can you complete these sentences about Spain?



Spain is a country in E _____. Its capital city is M _____.

The countries that border Spain are: F _____, P _____ and A _____.

The C _____ I _____ and the B _____ I _____ are also part of Spain.

The A _____ O _____ and the M _____ S _____ surround Spain, as well as the B ____ of B _____ and the B _____ S _____.

Name: _____ Date: _____



Can you identify where Spain and the UK are on this map of Europe, and shade them in? Complete the key below:



Key:
 Spain The UK

Now, on the map below, and using the Map of Spain to help you, can you complete the labels?



B __ of B __

F __

A __

A __

B __ S __

M __

P __

B __ I __

M __ S __

C __ I __

Extra Challenge: Can you find and label the autonomous community of Catalonia (or Cataluña in Spanish)?



Name: _____

Date: _____



On the map below, and using the Map of Spain to help you, can you label:

- the capital city of Spain
- the surrounding oceans and seas
- the islands belonging to Spain
- the bordering countries

Extra Challenge:

Can you shade in the 17 autonomous communities on the map, then fill in the key below correctly?



KEY:	<input type="checkbox"/> Galicia	<input type="checkbox"/> Pais Vasco
<input type="checkbox"/> La Rioja	<input type="checkbox"/> Extremadura	<input type="checkbox"/> Madrid
<input type="checkbox"/> Valencia	<input type="checkbox"/> Aragon	<input type="checkbox"/> Cataluña (Catalonia)
<input type="checkbox"/> Cantabria	<input type="checkbox"/> Castille and Leon	<input type="checkbox"/> Navarra
<input type="checkbox"/> Castilla La Mancha	<input type="checkbox"/> Asturias	<input type="checkbox"/> Canary Islands
<input type="checkbox"/> Murcia	<input type="checkbox"/> Andalucia	<input type="checkbox"/> Balearic Islands

Name: _____ Date: _____



Use the Map of Spain to answer the questions about Spain to complete the Fact File.

What is the capital city of Spain?

Which countries share a land border with Spain?

Which two groups of islands are part of Spain?

Which ocean is to the west of Spain?

How many autonomous communities are there?

Which sea is to the east of Spain?

Which is the largest island in the Canary Islands?



Which is the largest island in the Balearic Islands?

Name an autonomous community that is on the south coast.

Which sea is to the south of Spain?

Name an autonomous community that is on the north coast.

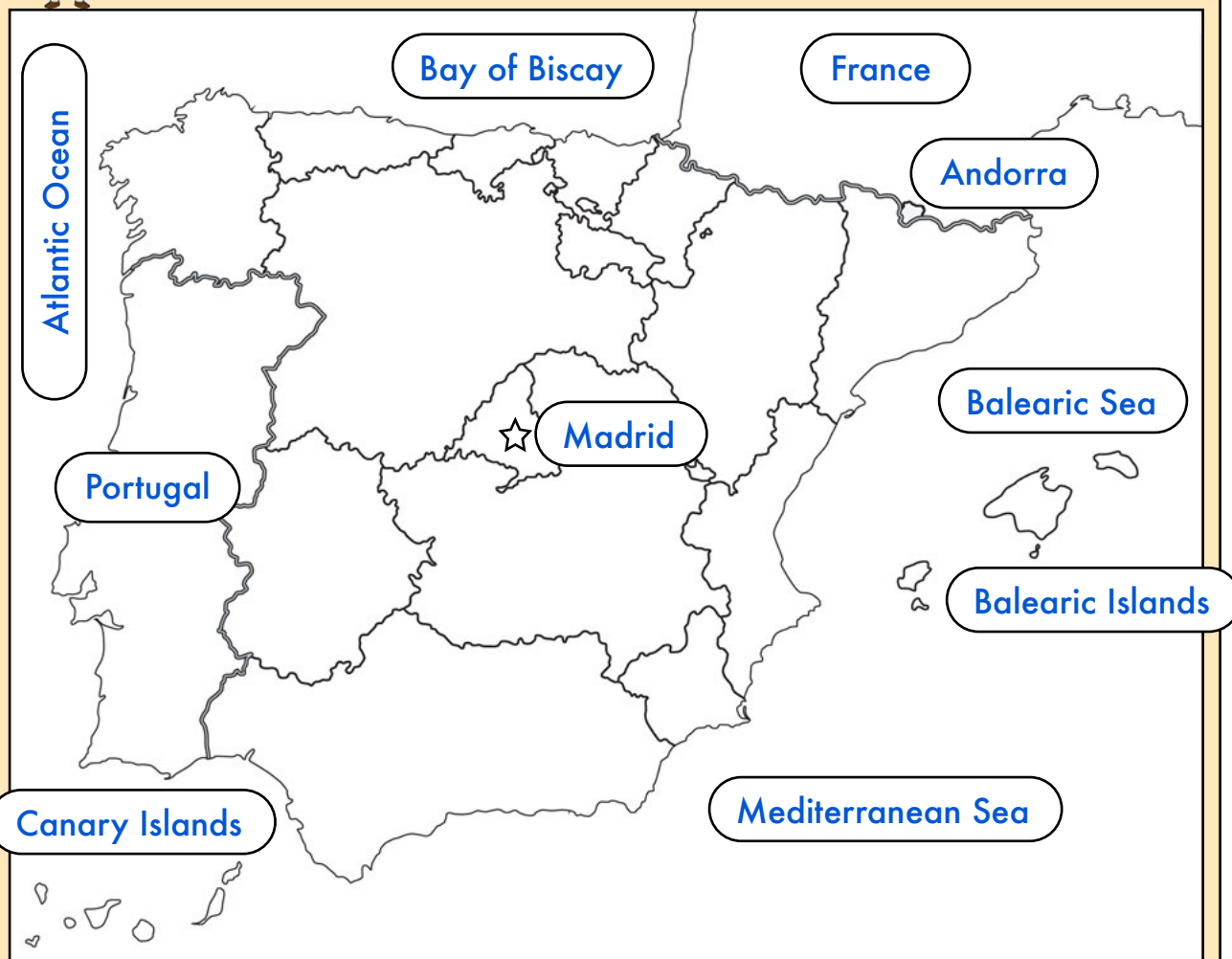
Name an autonomous community that shares a border with Portugal.

Which bay is to the north of Spain?

Name the autonomous community that shares a border with Andorra.



On the map below, and using the Map of Spain to help you, can you put the labels in the correct places?



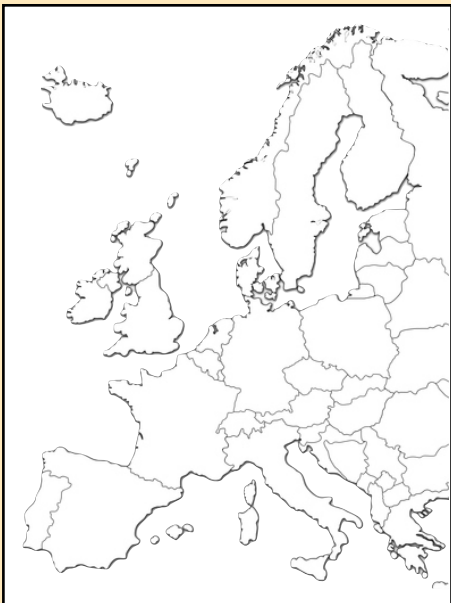
Now using your knowledge and the information on your map, can you complete these sentences about Spain?



Spain is a country in **EUROPE**. Its capital city is **MADRID**.
The countries that border Spain are: **FRANCE**, **PORTUGAL** and **ANDORRA**. The **CANARY ISLANDS** and the **BALEARIC ISLANDS** are also part of Spain. The **ATLANTIC OCEAN** and the **MEDITERRANEAN SEA** surround Spain, as well as the **BAY** of **BISCAY** and the **BALEARIC SEA**.



Can you identify where Spain and the UK are on this map of Europe, and shade them in? Complete the key below:



Key:

<input type="checkbox"/>	Spain	<input type="checkbox"/>	The UK
--------------------------	-------	--------------------------	--------

Now, on the map below, and using the Map of Spain to help you, can you complete the labels?



BAY OF BISCAY

FRANCE

ANDORRA

CATALONIA

BALEARIC SEA

MADRID

PORTUGAL

BALEARIC ISLANDS

MEDITERRANEAN SEA

CANARY ISLANDS

Extra Challenge: Can you find and label the autonomous community of Catalonia (or Cataluña in Spanish)?



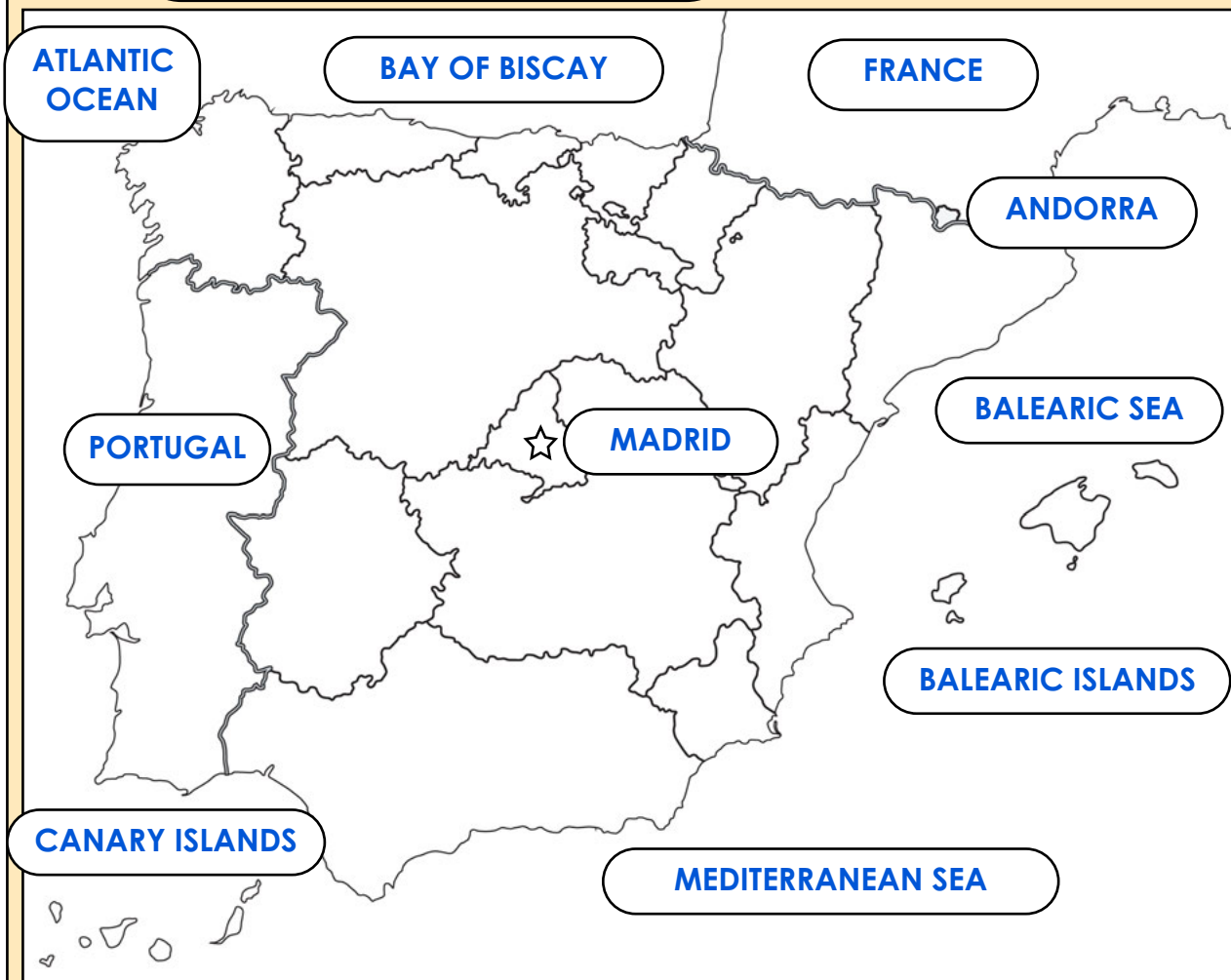


On the map below, and using the Map of Spain to help you, can you label:

- the capital city of Spain
- the surrounding oceans and seas
- the islands belonging to Spain
- the bordering countries

Extra Challenge:

THE MAP OF SPAIN CAN BE USED AS AN ANSWER SHEET FOR THIS CHALLENGE.



KEY:	<input type="checkbox"/> Galicia	<input type="checkbox"/> Pais Vasco
<input type="checkbox"/> La Rioja	<input type="checkbox"/> Extremadura	<input type="checkbox"/> Madrid
<input type="checkbox"/> Valencia	<input type="checkbox"/> Aragon	<input type="checkbox"/> Cataluña (Catalonia)
<input type="checkbox"/> Cantabria	<input type="checkbox"/> Castille and Leon	<input type="checkbox"/> Navarra
<input type="checkbox"/> Castilla La Mancha	<input type="checkbox"/> Asturias	<input type="checkbox"/> Canary Islands
<input type="checkbox"/> Murcia	<input type="checkbox"/> Andalucia	<input type="checkbox"/> Balearic Islands



Use the Map of Spain to answer the questions about Spain to complete the Fact File.

What is the capital city of Spain?

MADRID

Which countries share a land border with Spain?

PORTUGAL, FRANCE, ANDORRA

Which two groups of islands are part of Spain?

**BALEARIC ISLANDS
CANARY ISLANDS**

Which ocean is to the west of Spain?

ATLANTIC OCEAN

How many autonomous communities are there?

17

Which sea is to the east of Spain?

BALEARIC SEA

Which is the largest island in the Canary Islands?

TENERIFE



Which is the largest island in the Balearic Islands?

MALLORCA

Name an autonomous community that is on the south coast.

ANDALUCIA, MURCIA

Which sea is to the south of Spain?

MEDITERRANEAN SEA

Name an autonomous community that is on the north coast.

GALICIA, ASTURIAS, CANTABRIA, PAIS VASCO

Name an autonomous community that shares a border with Portugal.

GALICIA, CASTILLE AND LEON, EXTREMADURA, ANDALUCIA

Which bay is to the north of Spain?

BAY OF BISCAY

Name the autonomous community that shares a border with Andorra.

CATALONIA



Atlantic Ocean	Madrid
Mediterranean Sea	Balearic Sea
Portugal	Canary Islands
France	Balearic Islands
Andorra	Bay of Biscay

Atlantic Ocean	Madrid
Mediterranean Sea	Balearic Sea
Portugal	Canary Islands
France	Balearic Islands
Andorra	Bay of Biscay

Atlantic Ocean	Madrid
Mediterranean Sea	Balearic Sea
Portugal	Canary Islands
France	Balearic Islands
Andorra	Bay of Biscay

Atlantic Ocean	Madrid
Mediterranean Sea	Balearic Sea
Portugal	Canary Islands
France	Balearic Islands
Andorra	Bay of Biscay