

★ **Thursday 18<sup>th</sup> June.**

★ Good morning Class One! I hope you are all ok! Here is your joke for today:



Here are the answers for yesterdays maths workbook:

11 Count the number of objects.  
Fill in the blank with more or less.

Group A		23
Group B		18

Group A has  buttons than Group B.

12 Complete the number patterns.

(a) 28, 32, 36, 40, , 48, ,

(b) 98, 96, 94, 92, , ,

13 Write an equation to show the total number of wheels.



$$\boxed{3} \times \boxed{2} = \boxed{6}$$

There are  wheels in all.

14 There are 12 buttons.  
Draw an equal number of buttons on each shirt.




15 Count and write your answer in the box.

(a)

(b)

16 Circle the ice lolly sticks to show groups of 6.



There are  groups of 6 ice lolly sticks.

17 Fill in the blanks.

(a)  $36 = \boxed{3}$  tens  $\boxed{6}$  ones

(b)  $69 = \boxed{6}$  tens  $\boxed{9}$  ones

(c)  $83 = \boxed{8}$  tens  $\boxed{3}$  ones

(d)  $97 = \boxed{9}$  tens  $\boxed{7}$  ones

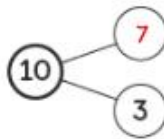
18  $\boxed{95}$  is 5 less than 100.

19  $\boxed{90}$  is 30 more than 60.

20 Arrange the numbers in order from the smallest to the greatest.

83      90      65  
 $\boxed{65}$  ,  $\boxed{83}$  ,  $\boxed{90}$

21 Complete the number bond.



22 There are 7 apples in Box A.  
There are 9 apples in Box B.  
How many apples are there altogether?

$$\boxed{7} + \boxed{9} = \boxed{16}$$

There are  $\boxed{16}$  apples altogether.



23 Fill in the blanks.



(a) Jar B has  $\boxed{16}$  marbles.

(b) Jar A has  $\boxed{8}$  fewer marbles than Jar B.

24 Compare the numbers.  
Fill in the blanks.

$\boxed{23}$        $\boxed{75}$        $\boxed{48}$

(a) 48 is less than  $\boxed{75}$ .

(b) 48 is more than  $\boxed{23}$ .

(c)  $\boxed{23}$  is the smallest.

(d)  $\boxed{75}$  is the greatest.

25 Write the time shown on each clock.




$\boxed{6 \text{ o'clock}}$



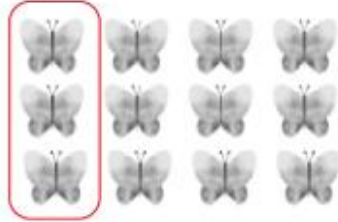
$\boxed{\text{half past } 12}$

26 Circle.


(a) Half of all the ladybirds



(b) A quarter of all the butterflies



27 Write the missing numbers.



There are  groups. Each group has  snails.

eights = . There are  snails.

28 Write the missing numbers.

- (a) 1 more than 50 is  .      (b) 1 less than 99 is  .  
(c) 2 more than 73 is  .      (d) 2 less than 84 is  .  
(e) 10 more than 60 is  .      (f) 10 less than 70 is  .



Maths starter:


### Place Value



Which number is the greatest?

Answer

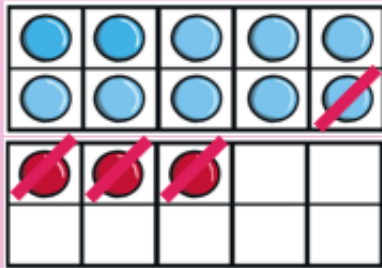
### Problem Solving



What number is shown here?

Answer

### + and -



$$13 - 4 = \square$$

Answer

### Reasoning

Which line is the shortest?  
Explain how you know.



**Maths:**

Workbook page: 165-168

**29** Compare using heavier than or lighter than.



The frog is  the rabbit.



The burger is  the tomato.

**30** (a)



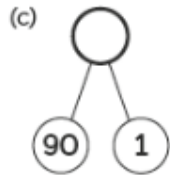
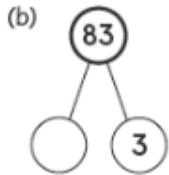
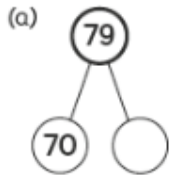
Double 7 =  sevens  
=

(b)



Double 8 =  eights  
=

**31** Complete the number bonds.



**32** The hour hand of the clock made a half turn. Draw where the hour hand is after the turn.



**33** Draw using  and .

(a)

32



(b)

49



**34** Count.



amount	number of coins
1 pence	<input type="text"/>
2 pence	<input type="text"/>
5 pence	<input type="text"/>

35 Colour.

(a) The beaker is full.



(b) The beaker is half full.

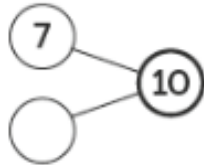
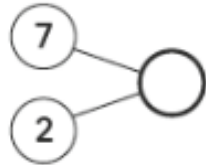
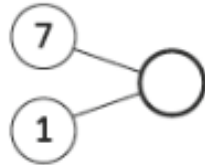


36 Write the missing numbers.

(a)  $7 + 1 = \square$

(b)  $7 + 2 = \square$

(c)  $7 + \square = 10$



37 Write the missing numbers.

(a)  $10 + \square = 12$

$10 - \square = 2$

(b)  $10 + \square = 16$

$10 - \square = 6$





# Guide to the top 10 garden birds

House sparrow



Starling



Blue tit



Blackbird



Woodpigeon

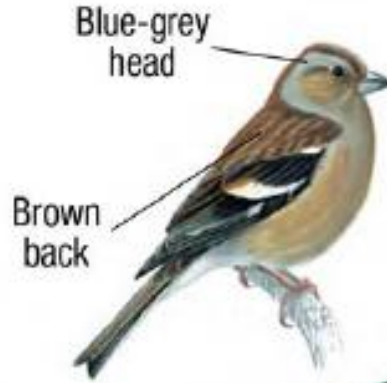


Goldfinch



Blue-grey head

Brown back



Chaffinch



Great tit



Robin

orange-red breast



Long-tailed tit

Pink and brown back

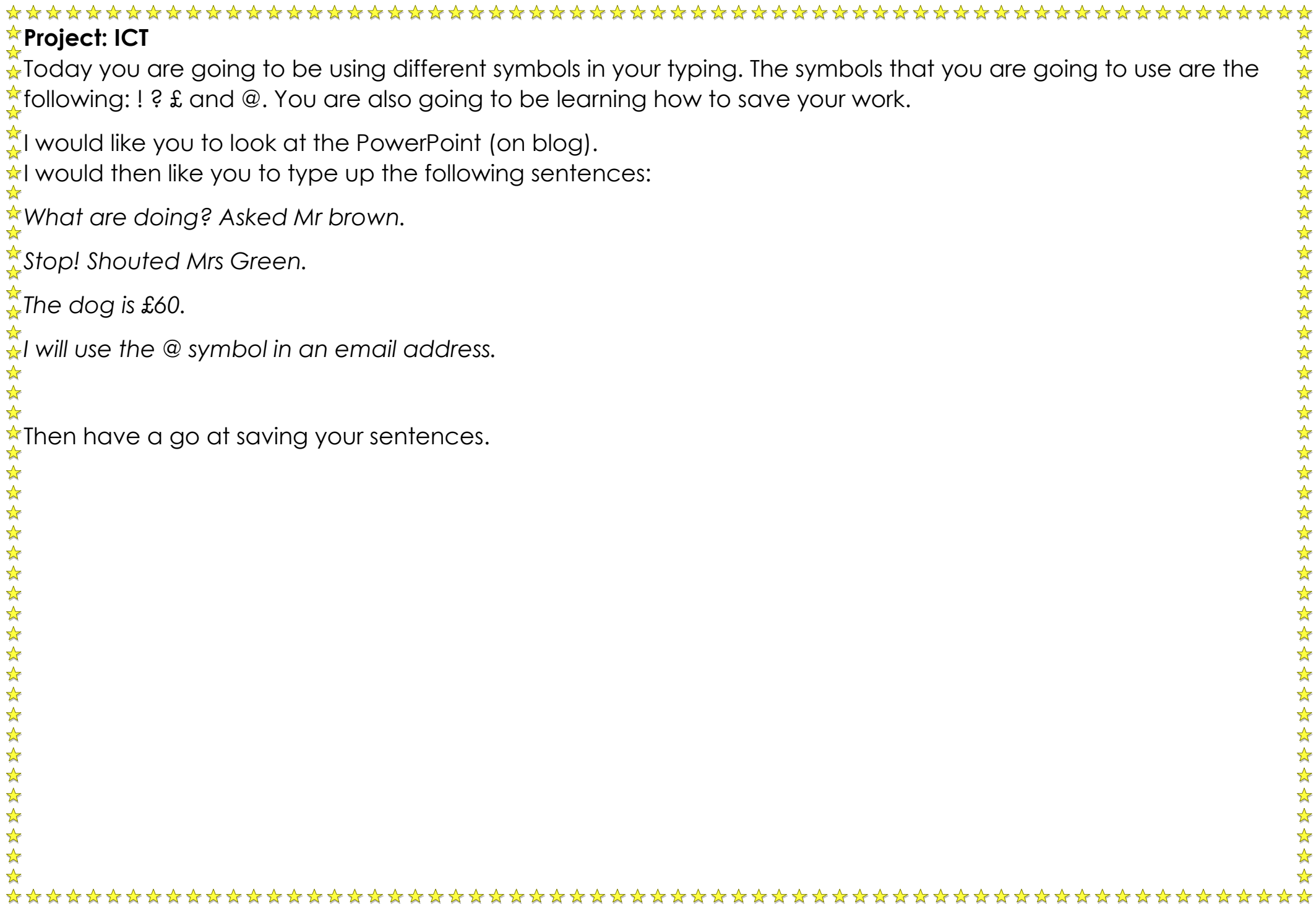
Small bill

Long thin black tail









★ **Project: ICT**

★ Today you are going to be using different symbols in your typing. The symbols that you are going to use are the following: ! ? £ and @. You are also going to be learning how to save your work.

★ I would like you to look at the PowerPoint (on blog).

★ I would then like you to type up the following sentences:

★ *What are doing? Asked Mr brown.*

★ *Stop! Shouted Mrs Green.*

★ *The dog is £60.*

★ *I will use the @ symbol in an email address.*

★ Then have a go at saving your sentences.